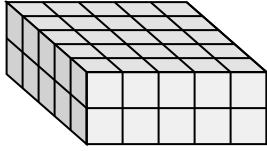


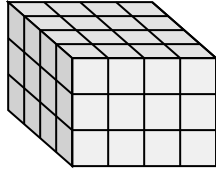


Match each problem with the equation that could represent it. Answer with the missing term and letter.

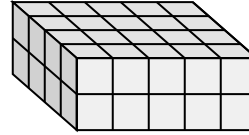
Ex)



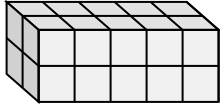
1)



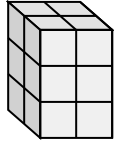
2)



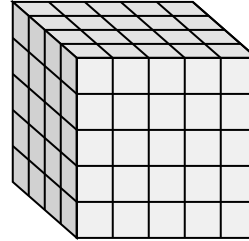
3)



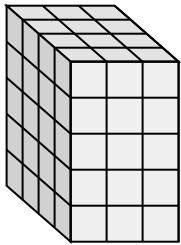
4)



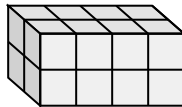
5)



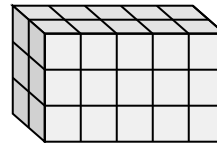
6)



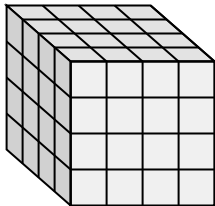
7)



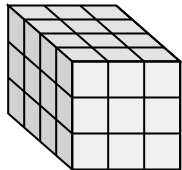
8)



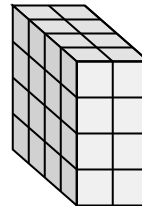
9)



10)



11)



Answers

Ex. A, 5

1. _____

2. _____

3. _____

4. _____

5. _____

6. _____

7. _____

8. _____

9. _____

10. _____

11. _____

A. $__ \times 5 \times 2 = 50$

B. $4 \times 2 \times 4 = __$

C. $4 \times __ \times 2 = 40$

D. $2 \times 2 \times 3 = __$

E. $__ \times 5 \times 5 = 100$

F. $4 \times __ \times 5 = 60$

G. $4 \times __ \times 3 = 48$

H. $4 \times __ \times 3 = 36$

I. $2 \times 5 \times 2 = __$

J. $__ \times 4 \times 2 = 16$

K. $2 \times 5 \times 3 = __$

L. $4 \times __ \times 4 = 64$

